



डिजाईन जागरुकता अभियान
DESIGN AWARENESS DRIVE

DAD



On the objectives of

National Design Policy

Govt. Of India

DAD-DESIGNED TO SUPPORT
NATIONAL DESIGN POLICY INDIA

Preparation of a platform for creative design development, design promotion and partnerships across many sectors, states and regions for integrating design with traditional and technological resources.

Global positioning and branding of Indian designs and making "Designed in India" a by-word for quality and utility in conjunction with "Made in India" and "Served in India".

UNITED COUNTRYOUTHS FEDERATION
THE CREATIVE LEADERS-INDIA2018





डिजाईन जागरुकता अभियान
DESIGN AWARENESS DRIVE

DAD/EDR/TLM/DETS/GAT2019/007

Total Marks : 100

Total Time : 2 Hrs 00 Mins



Instructions

1. Read the directions properly and carefully. Read twice, thrice till you get to understand the questions.
2. Go through details of every question most of the times answers are hidden inside the questions..
3. Think on maximum possible options at a time.
4. Marks shall be allotted on basis of observation, visualization, innovation and execution respectively.
5. Use colors where ever possible, until and unless it is restricted to do so.(at least in one question)
6. Maximum marks shall be awarded to neat, fresh and raw ideas.
7. Try to write about everything you draw or sketch.
8. Try to communicate in simple language to make it self-explanatory.

Design
Entrance
Examinations

2018-2019

DAD-Design Aptitude Test

DAD

Name:

Class:

Exam preparing for:

Address:

School/ Institution:

Contact:

D.O.B:

QUANTITATIVE ABILITY TEST

This test is designed to check the quantitative ability of a student and the knowledge to comprehend the calculations and system of numbers and the conviction in the end result.

1. The least number which when divided by 5, 6, 7 and 8 leaves a remainder 3, but when divided by 9 leaves no remainder, is:

A. 1677	B. 1683
C. 2523	D. 3363
2. The average of runs of a cricket player of 10 innings was 32. How many runs must he make in his next innings so as to increase his average of runs by 4 ?

A. 76	B. 79
C. 85	D. 87
3. The total age of A and B is 12 years more than the total age of B and C. C is how many years younger than A ?

A. 12	B. 13
C. 14	D. 15
4. The ratio 5 : 4 expressed as a percent equals

A. 12.5 %	B. 40 %
C. 80 %	D. 125 %
5. Bhajan Singh purchased 120 reams of paper at Rs 80 per ream. He spent Rs 280 on transportation, paid octroi at the rate of 40 paise per ream and paid Rs 72 to the coolie. If he wants to have a gain of 8 %, what must be the selling price per ream?

A. 90	B. 89
C. 87.48	D. 86
6. A, B and C can complete a piece of work in 24, 6 and 12 days respectively. Working together, they will complete the same work in:

A. 1/24 days	B. 7/24 days
C. 24/7 days	D. 4 days
7. In an examination, a student scores 4 marks for every correct answer and loses 1 mark for every wrong answer. If he attempts all 60 questions and secures 130 marks, the no of questions he attempts correctly is :

A. 35	B. 38
C. 40	D. 42
8. A sum of money amounts to Rs.6690 after 3 years and to Rs.10,035 after 6 years on compound interest. find the sum.

A. 4360	B. 4460
C.4560	D. 4660
9. The speed of a car increases by 2 kms after every one hour. If the distance travelling in the first one hour was 35 kms. What was the total distance travelled in 12 hours?

A. 456 kms	B. 482 kms
C. 552 kms	D. 556 kms
10. A mixture contains alcohol and water in the ratio 4 : 3. If 5 liters of water is added to the mixture, the ratio becomes 4: 5. Find the quantity of alcohol in the given mixture.

A. 10	B. 12
C. 15	D. 18
11. A number when divided by 296 leaves 75 as remainder. When the same number is divided by 37, the remainder will be:

A. 1	B. 3
C. 5	D. 2

12. If two letters are taken at random from the word HOME, what is the probability that none of the letters would be vowels?
 A. $\frac{1}{6}$ B. $\frac{1}{2}$
 C. $\frac{1}{3}$ D. $\frac{1}{4}$
13. A train running at the speed of 40 km/hr crosses a signal pole in 9 seconds. Find the length of the train?
 A. 90 mts B. 150 mts
 C. 120 mts D. 100 mts
14. A train 110 metres long is running with a speed of 60 kmph. In what time will it pass a man who is running at 6 kmph in the direction opposite to that in which the train is going?
 A. 5 B. 6
 C. 7 D. 10
15. If each edge of a cube is increased by 50%, find the percentage increase in Its surface area
 A. 125% B. 150%
 C. 175% D. 110%

ANALYTICAL ABILITY TEST

This test is designed to check the quantitative ability of a student and the knowledge to comprehend the calculations and system of numbers and the conviction in the end result.

Directions to Solve

Each problem consists of three statements. Based on the first two statements, the third statement may be true, false, or uncertain.

16. All the trees in the park are flowering trees. Some of the trees in the park are dogwoods.

All dogwoods in the park are flowering trees.

If the first two statements are true, the third statement is

- A. true
 B. false
 C. uncertain

Directions to Solve

Three of the words will be in the same classification, the remaining one will not be. Your answer will be the one word that does NOT belong in the same classification as the others.

17. Which word does NOT belong with the others?
 A. book B. index
 C. glossary D. chapter

Directions to Solve

Below in each of the questions are given two statements I and II. These statements may be either independent causes or may be effects of independent causes or a common cause. One of these statements may be the effect of the other statements. Read both the statements and decide which of the following answer choice correctly depicts the relationship between these two statements.

Mark answer

- A. If statement I is the cause and statement II is its effect.
 B. If statement II is the cause and statement I is its effect.
 C. If both the statements I and II are independent causes.
 D. If both the statements I and II are effects of independent causes.
 E. If both the statements I and II are effects of some common cause.

18. **Statements:**

Rural and semi-urban areas in the country have been suffering due to load-shedding for quite some time.

If the Government is not able to overcome the power crisis, load-shedding will be extended even to the urban areas.

- A. Statement I is the cause and statement II is its effect.
- B. Statement II is the cause and statement I is its effect.
- C. Both the statements I and II are independent causes.
- D. Both the statements I and II are effects of independent causes.
- E. Both the statements I and II are effects of some common cause.

Directions to Solve

Read each definition and all four choices carefully, and find the answer that provides the best example of the given definition.

19. Posthumous Publication occurs when a book is published after the author's death. Which situation below is the best example of Posthumous Publication ?
- A. Richard's illness took his life before he was able to enjoy the amazing early reviews of his novel.
 - B. Melissa's publisher cancels her book contract after she fails to deliver the manuscript on time.
 - C. Clarence never thought he'd live to see the third book in his trilogy published.
 - D. Elizabeth is honored with a prestigious literary award for her writing career and her daughter accepts the award on behalf of her deceased mother.

Directions to Solve

In each of the following questions find out the alternative which will replace the question mark.

20. CUP : LIP :: BIRD : ?
- | | |
|-----------|----------|
| A. BUSH | B. GRASS |
| C. FOREST | D. BEAK |

Directions to Solve

A good way to figure out the relationship in a given question is to make up a sentence that describes the relationship between the first two words. Then, try to use the same sentence to find out which of the answer choices completes the same relationship with the third word.

21. Careful is to cautious as boastful is to
- | | |
|-------------|---------------|
| A. arrogant | B. humble |
| C. joyful | D. suspicious |

Directions to Solve

Each of these questions is based on the following information:

- 1. M % N means M is the son of N.**
- 2. M @ N means M is the sister of N.**
- 3. M \$ N means M is the father of N.**

22. Which of the following shows the relation that S is the father of Q?
- | | |
|---------------|------------------|
| A. S @ P \$ Q | B. Q @ P % S |
| C. Q \$ S @ P | D. None of these |
23. Four friends A, B, C and D live in a same locality. The house of B is in the east of A's house but in the north of C's house. The house of C is in the west of D's house. D's house is in which direction of A's house?
- A. South-East
 - B. North-East
 - C. East

D. Data is inadequate

Directions to Solve

Look carefully for the pattern, and then choose which pair of numbers comes next.

24. 8 12 9 13 10 14 11
 A. 14 11 B. 15 12
 C. 8 15 D. 15 19
 E. 8 5
25. Y is in the East of X which is in the North of Z. If P is in the South of Z, then in which direction of Y, is P?
 A. North B. South
 C. South-East D. None of these

Directions to Solve

In each of the following questions, five words have been given out of which four are alike in some manner, while the fifth one is different. Choose the word which is different from the rest.

26. Choose the word which is different from the rest.
 A. Feathers B. Tentacles
 C. Scales D. Pseudopodia
 E. Flagella

Directions to Solve

In each of the following questions two statements are given and these statements are followed by two conclusions numbered (1) and (2). You have to take the given two statements to be true even if they seem to be at variance from commonly known facts. Read the conclusions and then decide which of the given conclusions logically follows from the two given statements, disregarding commonly known facts.

Give answer:

- (A) If only (1) conclusion follows
 (B) If only (2) conclusion follows
 (C) If either (1) or (2) follows
 (D) If neither (1) nor (2) follows and
 (E) If both (1) and (2) follow.

27. **Statements:** Some dogs are bats. Some bats are cats.
Conclusions:
 1. Some dogs are cats.
 2. Some cats are dogs.
 A. Only (1) conclusion follows
 B. Only (2) conclusion follows
 C. Either (1) or (2) follows
 D. Neither (1) nor (2) follows
 E. Both (1) and (2) follow

Directions to Solve

In each of the following questions find out the alternative which will replace the question mark.

28. MXN: 13 x 14 :: FXR : ?
 A. 14 x 15 B. 5 x 17
 C. 6 x 18 D. 7 x 19
29. 16 : 56 :: 32 : ?
 A. 96 B. 112
 C. 120 D. 128

Directions to Solve

In each question below is given a statement followed by two assumptions numbered I and II. You have to consider the statement and the following assumptions and decide which of the assumptions is implicit in the statement.

Give answer

- (A) If only assumption I is implicit
 (B) If only assumption II is implicit
 (C) If either I or II is implicit
 (D) If neither I nor II is implicit

(E) If both I and II are implicit.

30. **Statement:** Why don't you go to the court if the employer does not pay you the Provident Fund contribution?

Assumptions:

I. Courts can intervene in matters of dispute between employer and employees.

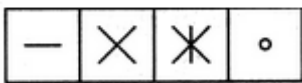

II. It is obligatory for the employer to pay the Provident Fund contribution to the employees.

- A. Only assumption I is implicit
- B. Only assumption II is implicit
- C. Either I or II is implicit
- D. Neither I nor II is implicit
- E. Both I and II are implicit

Directions to Solve

In each of the following questions, find out which of the answer figures (1), (2), (3) and (4) completes the figure matrix?

31. Select a suitable figure from the four alternatives that would complete the figure matrix.



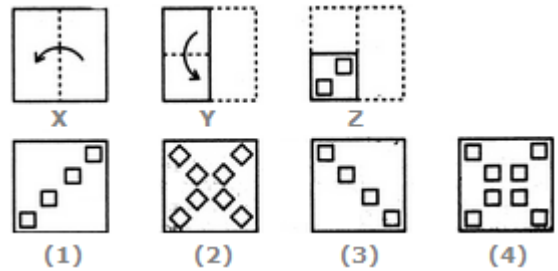
- (1) (2) (3) (4)
- A.1
 - B. 2
 - C. 3
 - D. 4

Directions to Solve

Each of the following questions consists of a set of three figures X, Y and Z showing a sequence of folding of a piece of paper. Figure (Z) shows the manner in which the folded paper has been cut. These three figures are

followed by four answer figures from which you have to choose a figure which would most closely resemble the unfolded form of figure (Z).

32. Choose a figure which would most closely resemble the unfolded form of Figure (Z).

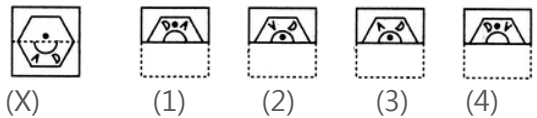


- A. 1
- B. 2
- C. 3
- D. 4

Directions to Solve

In each of the following problems, a square transparent sheet (X) with a pattern is given. Figure out from amongst the four alternatives as to how the patten would appear when the transparent sheet is folded at the dotted line.

33. Find out from amongst the four alternatives as to how the pattern would appear when the transparent sheet is folded at the dotted line.



- A. 1
- B. 2
- C. 3
- D. 4

Directions to Solve

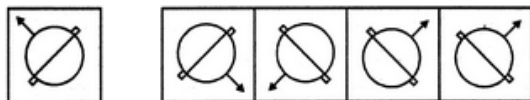
Six girls are sitting in a circle facing to the centre of the circle. They are P, Q, R, S, T and V. T is not between Q and S but some other one. P is next to the left of V. R is 4th to the right of P.

34. Which of the following statement is not true ?
- A. S is just next to the right to R
 - B. T is just next to the right of V
 - C. R is second to the left of T
 - D. P is second to the right of R

Directions to Solve

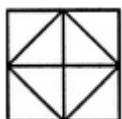
In each of the following questions, choose the correct mirror images of the given image of the Fig.(X) from amongst the four alternatives (1), (2), (3) and (4) given along with it.

35. Choose the correct mirror image of the given figure (X) from amongst the four alternatives.



- (X) (1) (2) (3) (4)
- A. 1
 - B. 2
 - C. 3
 - D. 4

36. Count the number of convex pentagons in the adjoining figure.



- A. 16
- B. 12
- C. 8
- D. 4

Directions to Solve

There are 128 cubes with me which are coloured according to two schemes viz.

1. 64 cubes each having two red adjacent faces and one yellow and other blue on their opposite faces while green on the rest.
2. 64 cubes each having two adjacent blue faces and one red and other green on their opposite faces, while

red on the rest. They are then mixed up.

37. What is the total number of red faces?
- A. 0
 - B. 64
 - C. 320
 - D. 128

Directions to Solve

In each of the following questions, you are given a combination of alphabets and/or numbers followed by four alternatives (1), (2), (3) and (4). Choose the alternative which is closely resembles the water-image of the given combination.

38. Choose the alternative which is closely resembles the water-image of the given combination.

bridge

- (1) p|qδe
- (2) p|qδe
- (3) p|qδe
- (4) p|pδe

- A. 1
- B. 2
- C. 3
- D. 4

Directions to Solve

All the faces of a cube are painted with blue colour. Then it is cut into 125 small equal cubes.

39. How many small cubes will be formed having only one face coloured?
- A. 54
 - B. 8
 - C. 16
 - D. 24

40. What is the minimum number of different colours required to paint the given figure such that no two adjacent regions have the same colour?



- A. 3
C. 5

- B. 4
D. 6

COMMUNICATION ABILITY TEST

Directions to Solve

Ideas and economic conditions make revolutions. Foolish people in authority, blind to everything that does not fit in with their ideas, imagine that revolutions are caused by agitators. Are people who are discontented with existing conditions and desire a change and work for it. Every revolutionary period has its full supply of them; they are themselves the outcome of the ferment and dissatisfaction that exist. But tens of thousands of people do not move to action merely at the bidding of an agitator. Most people desire security above everything else; they do not want to risk losing what they have got. But when economic conditions are such that their day-to-day suffering grows and life becomes almost an intolerable burden, then even the weak are prepared to take risk. It is then that they listen to the voice of the agitator who seems to show them a way out of their misery. Many revolutions in Asia and Europe failed because of the vagueness in thought and for want of an ideology. In a revolution, we find a new thing, the union of ideas with the economic urge for revolution, and a real revolution affects the whole fabric of life and society.

41. Agitators are those people who are
A. In authority but foolish
B. Discontented with those in authority
C. Revolutionaries
D. Discontented with the existing with the existing conditions

42. Most people
A. Move to action merely at the bidding of an agitator
B. Want security
C. Are willing to risk losing what they have got
D. Are agitators by nature
43. Revolutions are caused by
A. Ideas
B. Agitators
C. Economic conditions
D. Both A and C
44. People are prepared to take risk
A. At the bidding of an agitator
B. When economic conditions worsen
C. When life becomes almost an intolerable burden
D. Both B and C
45. Many revolutions in Asia and Europe failed because of
A. The vagueness in thought
B. Want to agitators
C. Lack of an ideology
D. Both A and C

Directions to Solve

After submitting his resignation, Albert came out and took the long narrow road leading to the railway station which was one of the busiest roads in the city. Sad, depressed and worried about looking for a new job, Albert looked around for a cigarette shop. He walked up to the end of the road but found no tobacconist. It was odd that such a busy thoroughfare with thousands of people passing through did not even have a single cigarette shop. He suddenly felt that it was no

longer necessary for him to hunt for a job. He decided to open a tobacco shop himself. It was bound to be profitable, he felt.

46. After submitting his resignation Albert came out worrying about
- A job
 - Cigarettes
 - A shelter
 - The next available train
47. Albert was sad and depressed because
- He was not able to buy cigarettes
 - He was worried about finding a job
 - He had to walk on a long road
 - He had no money for the train journey
48. There was no cigarette shop on that road because
- It was a very narrow road.
 - Smoking is banned in that area
 - Cigarette-shop owners do not make any profit
 - Just by chance nobody had opened one on that road
49. Albert decided not to look for a new job because
- He did not want to work at all
 - There was no hope of finding a job
 - The thought of having to look for a job greatly distressed him
 - He saw the possibility of self-employment
50. A cigarette shop on a busy road was bound to be profitable because
- Cigarettes are inexpensive items and people buy them willingly
 - Cigarette shop are known to make a great deal of profit

- A cigarette shop on a busy road would attract a large number of customers
- Any shop on a busy street would attract a large number of customers

Directions to Solve

The social Darwinist conception of evolutions is not that of the biologist but of the propagandist looking for justification for his political theories. The simplistic formulation of ferocious antisocial struggle finds no place in the theories of modern biologists. Even on the animal level the scientific picture is not that of "struggle" and ruthless elimination. If in the tropics a pigmented skin is an advantage, no one is swept to destruction in a fight for blackness. Modifications of that sort, which prove advantageous, gradually establish themselves without trouble. Even living on other animals for food does not imply savagery-fisherman are not unpleasant and aggressive person; tribes living, as they once did, on shellfish are not haters of haters of their kind; even pig breeders and chicken farmers can be kind to their neighbors and no worse than the rest of us. Lorenz. Constantly quoted to defend innate aggression, points out that the predatory carnivores are not angry when bringing down an antelope. It is simply a matter of going to fetch the dinner. A lion can be angry, but not when going out to kill. One might go on and take the whole case to pieces bit by bit, but enough has been said to indicate that the picture of "nature red in tooth and claw" is the poet's view – the phrase was Tennyson's – not the scientist's: it is tendentious, controversial exaggeration, not objective science. Even the notion of the

“survival – of the fittest” begs the question. If we say that the fittest survive, we only mean that they do survive. It implies no other quality than survival ability. It holds just as well for the oyster or the flourishing flea as for the beautifully adapted camel or flying fox. It does not follow that the survivor is the fittest even in being the finest specimen of its kind, let alone of the kind that we would prefer to see flourish.

51. The instinct to kill in carnivores comes from their
- Need to survive
 - Need to prove their might
 - Inherently brutal nature
 - Liking for flesh.
52. The writer’s attitude towards poets is that of
- | | |
|----------|-----------------|
| A. awe | B. scorn |
| C. anger | D. indifference |
53. The term ‘survival of the fittest’ suggest the survival of the
- | | |
|--------------|-------------|
| A. mightiest | B. finest |
| C. best | D. prepared |
54. By citing various examples the writer tries to establish the fact that savagery does not entail
- Killing of any king
 - Killing of lesser animals
 - Killing dispassionately to serve an end
 - Ruthless killing
55. The concept of ferocious antisocial struggle finds credence with
- | | |
|--------------|---------------|
| A. biologist | B. scientists |
| C. Lorenz | D. Darwin |

Directions to Solve

The difficulty in the education of young infants is largely the delicate balance required in the parents. Constant watchfulness and much labour are needed to avoid injury to health: these qualities will hardly exist in the necessary degree except where there is strong parental affection. But where this exists, it is very likely not to be wise. To the devoted parents, the child is immensely important. Unless care is taken, the child feel but later in life his social environment will not regard him so fondly and the habit of assuming that he is the centre of other people’s universe will lead to disappointment. It is, therefore, necessary, not only in the first year, but afterwards also, that parents should be breezy, cheerful and rather matter-of –fact where the child’s possible ailments are concerned. In old days, infants were too much petted, sung to, rocked and dandled. This was wrong since it turned them into helpless pampered parasites. The right rule is : encourage spontaneous activities but discourage demands on others. Do not let the child see how much you do for him or how much trouble you take. Let him, wherever possible, taste the joy of success, achieved by his own efforts, not extracted by tyrannising over the grown-ups.

56. ‘Delicate balance’ required in parents in sentence one refers to
- cautiousness
 - possessiveness
 - indifference
 - matter-of-factness
57. In the past the excessively fondled children became

- A. troublesome B. mischievous C. Pasanger D. Pesanger
C. parasites D. abnormal

58. For the possible ailments of the child, the writer advised the parents to be

- A. indifferent B. demanding
C. unsympathetic D. matter-of-fact

59. The author wishes the parents to let the child

- A. manage his own things
B. be absolutely free
C. work under their guidance
D. seek anybody's help if needed

60. A child pampered by his parents is likely to become

- A. disappointed B. demoralized
C. dependent D. independent

Directions to Solve

In the following questions choose the word which is the exact **OPPOSITE** of the given words.

61. ADHERENT

- A. Detractor B. Enemy
C. Alien D. Rival

62. BASE

- A. Climax B. Height
C. Top D. Roof

63. ARTIFICIAL

- A. Red B. Natural
C. Truthful D. Solid

Directions to Solve

Find the correctly spelt words.

64. (solve as per the direction given above)

- A. Pessenger B. Passenger

65. (solve as per the direction given above)

- A. Vetarinary B. Vetenary
C. Vetinary D. Veterinary

66. (solve as per the direction given above)

- A. Simpall B. Bannar
C. Pattren D. Modern

Directions to Solve

In each question below, there is a sentence of which some parts have been jumbled up. Rearrange these parts which are labelled P, Q, R and S to produce the correct sentence. Choose the proper sequence.

67. It was to be

P : before their school examination

Q : which was due to start

R : the last expedition

S : in a month's

The Proper sequence should be:

- A. SRQP B. RQSP
C. RPQS D. SPRQ

68. This time

P : exactly what he had been told

Q : the young man did

R : beyond his dreams

S : and the plan succeeded

The Proper sequence should be:

- A. QPRS B. QPSR
C. PQSR D. QSRP

Directions to Solve

In questions given below, a part of the sentence is **italicised and underlined**. Below are given alternatives to the italicised part which may improve the sentence. Choose the correct

alternative. In case no improvement is needed, option 'D' is the answer.

69. Please remind me of posting these letters to my relatives.
 A. by posting
 B. to post
 C. for posting
 D. No improvement
70. Not a word they spoke to the unfortunate wife about it
 A. did they speak
 B. they will speak
 C. they had spoken
 D. No improvement

Directions to Solve

Pick out the most effective word(s) from the given words to fill in the blank to make the sentence meaningfully complete.

71. We had to pay more taxi fare because the driver brought us by a route.
 A. circular B. circumscribed
 C. longest D. circuitous
72. He knew everything better than anybody else, and it was an affront to his vanity that you should disagree with him.
 A. overstrung B. overweening
 C. overwhelming D. overwrought

Directions to Solve

In questions below, each passage consist of six sentences. The first and sixth sentence are given in the beginning. The middle four sentences in each have been removed and jumbled up. These are labelled as P, Q, R and S. Find out the proper order for the four sentences.

73. S_1 : A force of exists between everybody in the universe.
 P : Normally it is very small but when the one of the bodies is a planet, like earth, the force is considerable.
 Q : It has been investigated by many scientists including Galileo and Newton.
 R : Everything on or near the surface of the earth is attracted by the mass of earth.
 S : This gravitational force depends on the mass of the bodies involved.
 S_6 : The greater the mass, the greater is the earth's force of attraction on it. We can call this force of attraction gravity.
 The Proper sequence should be:
 A. PRQS B. PRSQ
 C. QSRP D. QSPR

74. S_1 : Calcutta unlike other cities keeps its trams.
 P : As a result there horrendous congestion.
 Q : It was going to be the first in South Asia.
 R : They run down the centre of the road
 S : To ease in the city decided to build an underground railway line.
 S_6 : The foundation stone was laid in 1972.
 The Proper sequence should be:
 A. PRSQ B. PSQR
 C. SQRP D. RPSQ

Directions to Solve

In questions given below out of four alternatives, choose the one which can be substituted for the given word/sentence.

75. Hater of learning and knowledge
 A. Misologist B. Bibliophile
 C. Misognist D. Misanthropist

76. A person of good understanding knowledge and reasoning power
- | | |
|-----------|-----------------|
| A. Expert | B. Intellectual |
| C. Snob | D. Literate |

Directions to Solve

In each question, an incomplete statement (Stem) followed by fillers is given. Pick out the best one which can complete incomplete stem correctly and meaningfully.

77. He tames animals because he.....
- | |
|--------------------------|
| A. is fond of them |
| B. hates them |
| C. is afraid of them |
| D. want to set them free |
| E. seldom loves them |

Directions to Solve

In the following the questions choose the word which best expresses the meaning of the given word.

78. DEBACLE
- | | |
|-------------|-------------|
| A. Collapse | B. Decline |
| C. Defeat | D. Disgrace |

Directions to Solve

But I did not want to shoot the elephant. I watched him beating his bunch of grass against his knees, with the preoccupied grandmotherly air that elephants have. It seemed to me that it would be murder to shoot him. I had never shot an elephant and never wanted to. (Somehow it always seems worse to kill large animal.) Besides, there was the beast's owner to be considered. But I had got to act quickly. I turned to some experienced-looking Burmans who had been there when we

arrived, and asked them how the elephants had been behaving. They all said the same thing; he took no notice of you if you left him alone, but he might charge if you went too close to him.

79. The phrase 'Preoccupied grandmotherly air' signifies
- | |
|---|
| A. being totally unconcerned |
| B. pretending to be very busy |
| C. a very superior attitude |
| D. calm, dignified and affectionate disposition |
80. From the passage it appears that the author was
- | |
|----------------------------|
| A. an inexperienced hunter |
| B. kind and considerate |
| C. possessed with fear |
| D. a worried man |
81. The author did not want to shoot the elephant because he
- | |
|---|
| A. was afraid of it |
| B. did not have the experience of shooting big animals |
| C. did not wish to kill animal which was not doing anybody any harm |
| D. did not find the elephant to be ferocious |

Directions to Solve

In the questions below the sentences have been given in Active/Passive voice. From the given alternatives, choose the one which best expresses the given sentence in Passive/Active voice.

82. She spoke to the official on duty.
- | |
|--|
| A. The official on duty was spoken to by her |
|--|

- B. The official was spoken to by her on duty.
 C. She was spoken to by the official on duty.
 D. She was the official to be spoken to on duty.
83. You can play with these kittens quite safely.
 A. These kittens can played with quite safely.
 B. These kittens can play with you quite safely.
 C. These kittens can be played with you quite safely.
 D. These kittens can be played with quite safely.
- Directions to Solve**
In each question below a sentence broken into five or six parts. Join these parts to make a meaningful sentence. The correct order of parts is the answer.
84. 1. was 2. and 3. Suresh
 4. kind 5. loving
 A. 31425 B. 54213
 C. 34251 D. 15243
 E. 12345
85. 1. not 2. Hari 3. away
 4. run 5. did
 A. 13542 B. 35412
 C. 52431 D. 25143
 E. 21345
86. The landmass of which of the following continents is the least?
 A. Africa B. Asia
 C. Australia D. Europe
87. Who is the first Indian woman to win an Asian Games gold in 400m run?
 A. M.L.Valsamma B. P.T.Usha
 C. Kamaljit Sandhu D.
 K.Malleshwari
88. The centenary of Mahatma Gandhi's arrival in South Africa was celebrated in
 A. May 1993 B. August 1993
 C. July 1993 D. September 1993
89. The main aim of SAARC is
 A. Regional Cooperation
 B. Internal affairs
 C. Non-alignity
 D. Peaceful Coexistence
90. The National Chemical Laboratory is situated in
 A. New Delhi B. Bangalore
 C. Pune D. Patna
91. Allahabad bank has informed that ___ rupees was infused by centre as an investment during the current financial year 2018-19?
 A. Rs 3,054 crore B. Rs 2,560 crore
 C. Rs 4,500 crore D. Rs 7,300 crore
92. His plan was so complicated that it floored his listeners.
 A. entertained B. puzzled
 C. annoyed D. encouraged
93. Bihar government has approved a proposal to offer ___ rupees to every girl graduating in 2018 and onwards?
 A. Rs 25,000 B. Rs 12,000
 C. Rs 45,000 D. Rs 36,000

94. Florist Santiago Lopez from Argentina has named a royal blue rose in honour of which Indian playback singer?
- A. Asha Bhosle B. Lata Mangeshkar
C. P Susheela D. P Chitra
95. Where did the 5th edition of the 10-day "Women of India National Organic Festival 2018" conclude on 4th November 2018?
- A. New Delhi B. Mumbai
C. Chennai D. Hyderabad
96. First International Peace Congress was held in London in
- A. 1564 AD B. 1798 AD
C. 1843 AD D. 1901 AD
97. Manipur government signed a MoU with Price waterhouse Coopers Pvt. Ltd. and which company for implementation of Smart City Project in Imphal, on 6th November 2018?
- A. Reliance Infra
B. IL&FS Township and Urban Assets Limited
C. L&T Infratech
D. Premium Builders Pvt. Ltd.
98. Union Cabinet chaired by Prime Minister Narendra Modi approved MoU between India and Italy for training and education in the fields of ____ on 8th November 2018?
- A. Labour and Employment
B. Defence
C. Science and Technology
D. Commerce and Industry
99. Union government awarded which State Police for "good practices" under the Crime and Criminal Tracking Network & Systems (CCTNS), on 30th October 2018?
- A. Bihar B. Tamil Nadu
C. Uttar Pradesh D. Assam
100. Who is brand ambassador of Kolkatta Fashion week?
- A. M.S. Dhoni B. Anushka Sharma
C. Alia Bhatt D. Kriti Sanon